

Activity 1

Fill-in the missing pictures & words

Old Macdonald has lost his flock of sheep. Can you draw 5 sheep in the field for him?



Fill in the missing words from this poem:

Little Bo _____ has lost her _____

And doesn't know where to find them,

Leave them alone and they'll come _____

Wagging their tails behind _____



Farm Visit Activity Sheet


KS1

National Curriculum
based stimulus
suitable for 5-7 years

Activity 2

Be first to spot these animals

When you see the animal around the Farm, just tick the box!




Reindeer



Wallaby



Meerkats



Rhea

Now answer these questions using the animal facts board to help you (you may also need an adult to help you read the harder words.)

What is a male Rhea called? _____

How far can a wallaby jump? _____



Can reindeers swim? _____

Can you guess the average lifespan of a Meerkat? _____



Activity 3 Spot the difference

Can you spot the seven differences between these two pictures?
Also, colour in the two farmhouses.




Activity 4 Puzzle page

Unscramble the letters to reveal the name of an animal which lives on Old Macdonald's farm.

low _____ ykenod _____ nekhcci _____

aamll _____ hspee _____ tpaorr _____

Complete the crossword.



Answer these maths questions:

If Old Macdonald had 2 chickens and they each laid 5 eggs, how many eggs would he have?

$$5 + 5 = \underline{\hspace{2cm}}$$

Mrs Macdonald is growing 3 rows of runner beans. Each row has 3 beans on it. How many beans has she got altogether?

$$3 + 3 + 3 = \underline{\hspace{2cm}}$$

Unscrambled letters - you'll find the answers here:

chicken

donkey

owl

parrot

llama

sheep



Activity 4 Puzzle page

Unscramble the letters to reveal the name of an animal which lives on Old Macdonald's farm.

low _____ ykenod _____ nekhcci _____

aamll _____ hspee _____ tpaorr _____

Complete the crossword.

| | | | | | | | | | | | | |
|---|---|---|---|---|---|---|---|---|---|---|---|---|
| | | | s | h | e | | p | | f | | | |
| c | o | | | | | | | | e | | d | |
| | | a | l | | a | c | a | | r | | | |
| d | | l | | a | | h | | | r | | e | |
| o | | l | | | e | i | n | d | | e | r | |
| n | | a | | r | | p | | | t | | | h |
| | | b | | o | | m | | g | | | | o |
| e | | Y | | T | | o | | o | t | t | t | |
| y | | | | | | n | | a | | | | s |
| | | m | e | e | r | | a | t | | | | e |

Answer these maths questions:

If Old Macdonald had 2 chickens and they each laid 5 eggs, how many eggs would he have?

$$5 + 5 = \underline{\hspace{2cm}}$$

Mrs Macdonald is growing 3 rows of runner beans. Each row has 3 beans on it. How many beans has she got altogether?

$$3 + 3 + 3 = \underline{\hspace{2cm}}$$



Activity 5 Drawing task

Can you draw the other half of this Alpaca's face? Draw a line down the line of symmetry.

